





NAME _____ DATE _____

SUBTRACTIONS

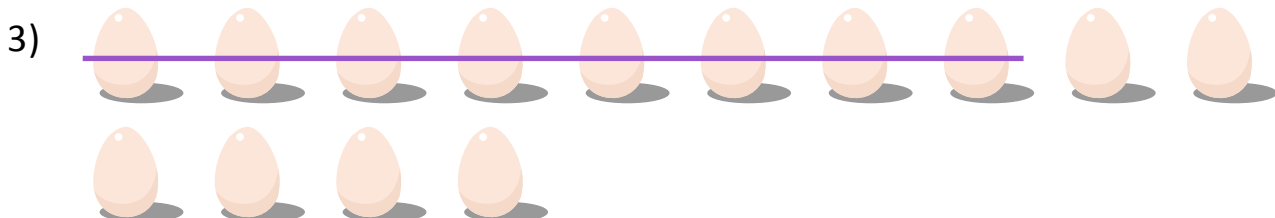
See the picture and fill in the math story. Also show in a number sentence.



In a zoo there are ____ lions. ____ lions are inside the cage. How many lions are outside the cage?



In a park there are ____ children playing. After some time ____ children went away. How many children are still playing in the park?



Ben has ____ eggs. In the afternoon he ate ____ eggs. How many eggs are left with Ben?